

Table of Contents

Addition facts 11–18	4-5
Subtraction facts 11–18	6-7
Number sequencing.....	8–9
Place value: tens and ones	10–11
Odd and even numbers	12–13
Greater than, less than.....	14–15
Time: hour and 5-minute intervals	16–17
Time: elapsed time.....	18–19
Problem solving: money	20–21
Money: addition up to one dollar	22–23
2-digit addition and subtraction with regrouping	24–25
Column addition	26–27
Problem solving: 2-digit addition and subtraction	28–29
Picture graphs.....	30–31
Coordinate geometry	32–33
Measurement	34–37
Place value: hundreds, tens and ones	38–39
Problem solving: dollars and cents.....	40–41
Geometry: symmetry and shapes	42–43
3-digit addition with and without regrouping ones to tens	44–45
3-digit addition: regrouping tens to ones	46–47
3-digit subtraction with and without regrouping tens to ones.....	48–49
3-digit subtraction: regrouping hundreds to tens	50–51
Problem solving: 3-digit addition and subtraction	52–53
Multiplication	54–57
Problem solving: multiplication	58–59
Fractions.....	60–63
Problem solving.....	64




Peppery Place Value

Count the peppers. Write the number of tens and the number of ones. Then write the total number of peppers on the bowl.



_____ tens and _____ ones.




_____ tens and _____ ones.



_____ tens and _____ ones.



Number Games



Read the numbers in each noughts and crosses game. Circle the odd numbers. Draw an X on the even numbers. Then draw a line through three numbers in a row that are all odd or all even. The line may go down, across or diagonally.

29	24	46
66	38	25
73	52	89

60	90	49
55	81	13
16	21	74

63	58	11
51	75	32
30	77	49

78	96	23
85	20	34
99	1	57

31	18	54
98	45	62
67	39	88

100	36	17
61	59	82
83	94	37

68	92	47
15	80	95
27	65	72

69	97	22
43	56	19
91	70	48










53	93	26
88	71	97
14	50	64



time: elapsed
time


Read each story and write the answer to the question.




















<p>Sharon left the house to go for a walk at</p>  <p>She walked for 2 hours.</p> <p>What time was it when she got home? _____</p>	<p>Pat got on the train to go to grandmother's at</p>  <p>He rode for 4 hours.</p> <p>What time did he arrive at her house? _____</p>
<p>Jenny left the house to go to the circus at</p>  <p>She was gone for 3 hours.</p> <p>What time did Jenny arrive back home? _____</p>	<p>Every day Linda swims from</p>  <p>to</p>  <p>How many hours does she swim each day? _____</p>
<p>Greg rollerbladed from</p>  <p>to</p>  <p>How many hours did he rollerblade? _____</p>	<p>Arnie hiked from</p>  <p>to</p>  <p>How many hours did he hike? _____</p>



Saving for Something Special



Read each problem. Then count the money. Now write the problem and solve it.

Julie had _____ ¢					
She spent 15¢. How much does she have left?					
Rafael had _____ ¢					
He swept the porch and earned 50¢. How much does he have now?					
Sharice has _____ ¢					
Agnes has 10¢. How much more money does Sharice have than Agnes?					
Abe has _____ ¢					
Liam has 25¢. How much money do the boys have in all?					