











Name _____

How many of each? Write the numeral.

 <div style="border: 1px solid black; width: 40px; height: 40px; margin: 0 auto; display: flex; align-items: center; justify-content: center;">4</div>	 <div style="border: 1px solid black; width: 40px; height: 40px; margin: 0 auto;"></div>	 <div style="border: 1px solid black; width: 40px; height: 40px; margin: 0 auto;"></div>	
 <div style="border: 1px solid black; width: 40px; height: 40px; margin: 0 auto;"></div>	 <div style="border: 1px solid black; width: 40px; height: 40px; margin: 0 auto;"></div>	 <div style="border: 1px solid black; width: 40px; height: 40px; margin: 0 auto;"></div>	 <div style="border: 1px solid black; width: 40px; height: 40px; margin: 0 auto;"></div>
 <div style="border: 1px solid black; width: 40px; height: 40px; margin: 0 auto;"></div>	 <div style="border: 1px solid black; width: 40px; height: 40px; margin: 0 auto;"></div>	 <div style="border: 1px solid black; width: 40px; height: 40px; margin: 0 auto;"></div>	


Fill in the missing numerals.

0	1			4				8		
---	---	--	--	---	--	--	--	---	--	--


NUMBER CORRECT:	
NUMBER POSSIBLE:	16

Name _____


How many of each? Circle the correct numeral.



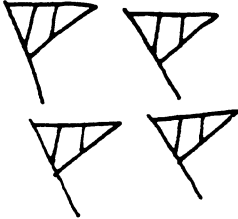
8 10 6




7 9 8




3 4 2




7 6 4




10 9 1




4 8 6



4 6 3



7 6 9



7 4 5

Fill in the missing numerals.










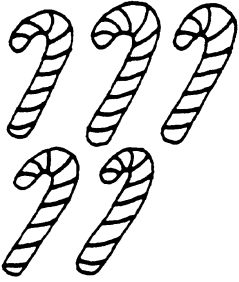
0		2	3				7		9	
---	--	---	---	--	--	--	---	--	---	--

0	1					6		8		10
---	---	--	--	--	--	---	--	---	--	----

NUMBER CORRECT	
NUMBER POSSIBLE	20

Name _____

How many of each? Write the numeral.

 <div style="border: 1px solid black; width: 40px; height: 40px; text-align: center; margin: 0 auto;">3</div>	 <div style="border: 1px solid black; width: 40px; height: 40px; margin: 0 auto;"></div>	 <div style="border: 1px solid black; width: 40px; height: 40px; margin: 0 auto;"></div>	
 <div style="border: 1px solid black; width: 40px; height: 40px; margin: 0 auto;"></div>	 <div style="border: 1px solid black; width: 40px; height: 40px; margin: 0 auto;"></div>	 <div style="border: 1px solid black; width: 40px; height: 40px; margin: 0 auto;"></div>	
 <div style="border: 1px solid black; width: 40px; height: 40px; margin: 0 auto;"></div>	 <div style="border: 1px solid black; width: 40px; height: 40px; margin: 0 auto;"></div>	 <div style="border: 1px solid black; width: 40px; height: 40px; margin: 0 auto;"></div>	 <div style="border: 1px solid black; width: 40px; height: 40px; margin: 0 auto;"></div>

Fill in the missing numerals.

0		2	3				7		9	
---	--	---	---	--	--	--	---	--	---	--

NUMBER CORRECT	
NUMBER POSSIBLE	15