



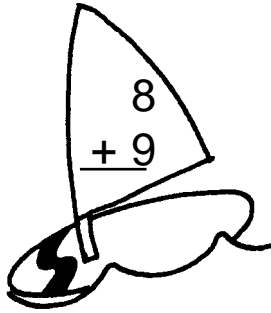
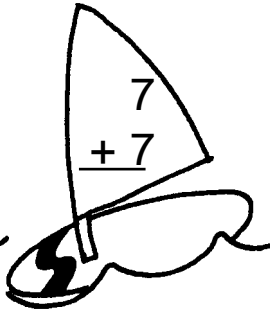
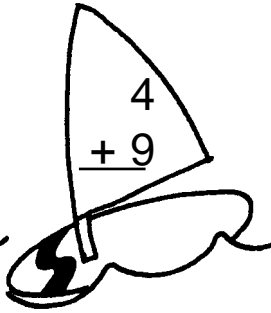

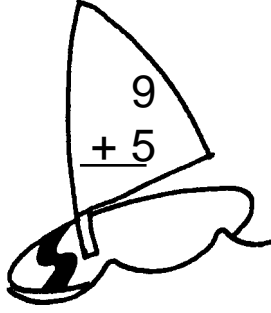
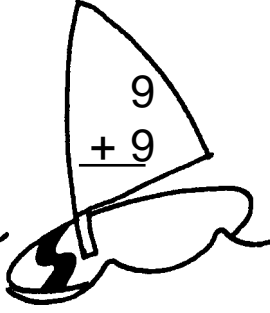

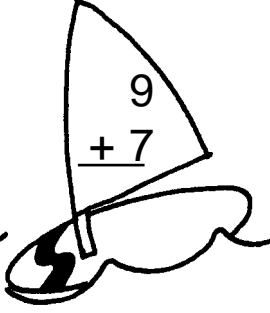
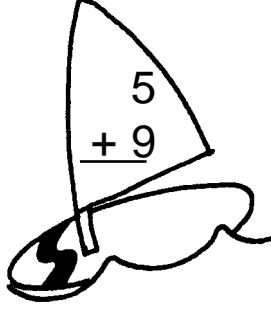



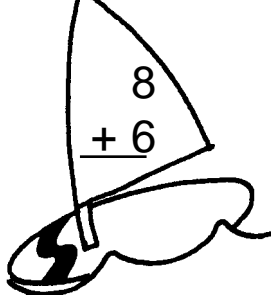



## Table of Contents

Addition facts 11–18 .....	4-5
Subtraction facts 11–18 .....	6-7
Number sequencing.....	8–9
Place value: tens and ones .....	10–11
Odd and even numbers .....	12–13
Greater than, less than.....	14–15
Time: hour and 5-minute intervals .....	16–17
Time: elapsed time.....	18–19
Problem solving: money .....	20–21
Money: addition up to one dollar .....	22–23
2-digit addition and subtraction with regrouping .....	24–25
Column addition .....	26–27
Problem solving: 2-digit addition and subtraction .....	28–29
Picture graphs.....	30–31
Coordinate geometry .....	32–33
Measurement .....	34–37
Place value: hundreds, tens and ones .....	38–39
Problem solving: dollars and cents.....	40–41
Geometry: symmetry and shapes .....	42–43
3-digit addition with and without regrouping ones to tens .....	44–45
3-digit addition: regrouping tens to ones .....	46–47
3-digit subtraction with and without regrouping tens to ones.....	48–49
3-digit subtraction: regrouping hundreds to tens .....	50–51
Problem solving: 3-digit addition and subtraction .....	52–53
Multiplication .....	54–57
Problem solving: multiplication .....	58–59
Fractions.....	60–63
Problem solving.....	64

7 - 2 3 + - 3 2 = 7 + 2 3

# Surf the Facts

Add the numbers on the sail. Then write the sum on the sailboard.



Add the number on the sailboard to each number on the wave. Write the sum in the box.

Sailboat with sail number 9+. The grid contains the following numbers:

8	
6	
9	
7	

Sailboat with sail number 5+. The grid contains the following numbers:

7	
9	
6	
8	

Sailboat with sail number 7+. The grid contains the following numbers:

7	
4	
8	
5	

Sailboat with sail number 6+. The grid contains the following numbers:

8	
5	
9	
6	

Sailboat with sail number 4+. The grid contains the following numbers:

9	
10	
7	
8	

Sailboat with sail number 8+. The grid contains the following numbers:

8	
5	
9	
3	



## Search for the Facts



Subtract the problems. Write the answer on the camel footprint.

$$\begin{array}{r} 16 \\ - 8 \\ \hline \end{array}$$

$$\begin{array}{r} 15 \\ - 6 \\ \hline \end{array}$$

$$\begin{array}{r} 14 \\ - 7 \\ \hline \end{array}$$

$$\begin{array}{r} 18 \\ - 9 \\ \hline \end{array}$$

$$\begin{array}{r} 15 \\ - 8 \\ \hline \end{array}$$

$$\begin{array}{r} 13 \\ - 5 \\ \hline \end{array}$$

$$\begin{array}{r} 14 \\ - 8 \\ \hline \end{array}$$

$$\begin{array}{r} 13 \\ - 4 \\ \hline \end{array}$$

$$\begin{array}{r} 13 \\ - 6 \\ \hline \end{array}$$

$$\begin{array}{r} 16 \\ - 9 \\ \hline \end{array}$$

$$\begin{array}{r} 15 \\ - 7 \\ \hline \end{array}$$

$$\begin{array}{r} 17 \\ - 9 \\ \hline \end{array}$$

$$\begin{array}{r} 14 \\ - 6 \\ \hline \end{array}$$

$$\begin{array}{r} 13 \\ - 9 \\ \hline \end{array}$$

$$\begin{array}{r} 16 \\ - 7 \\ \hline \end{array}$$

$$\begin{array}{r} 14 \\ - 9 \\ \hline \end{array}$$

$$\begin{array}{r} 13 \\ - 8 \\ \hline \end{array}$$

$$\begin{array}{r} 14 \\ - 5 \\ \hline \end{array}$$

$$\begin{array}{r} 17 \\ - 8 \\ \hline \end{array}$$

$$\begin{array}{r} 15 \\ - 9 \\ \hline \end{array}$$



Start at the bottom of the page. Subtract to find out if the answer is correct. Colour the block if the answer is correct and you will discover the passageway to the pyramid's treasure room.

