

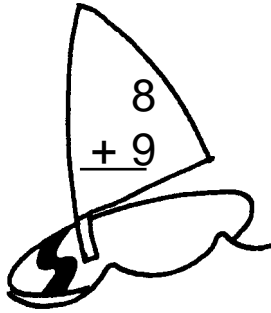
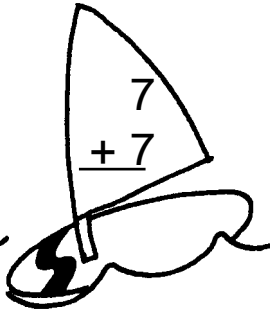
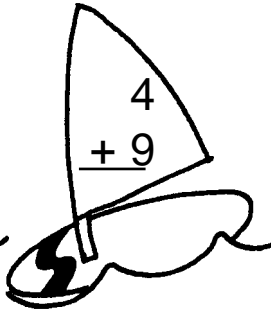

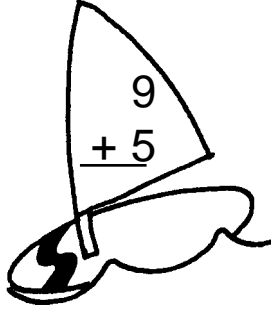
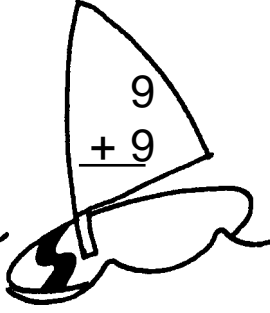

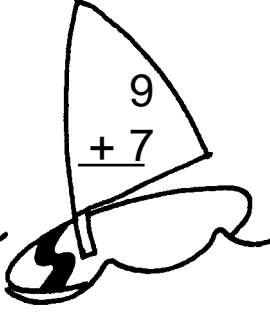
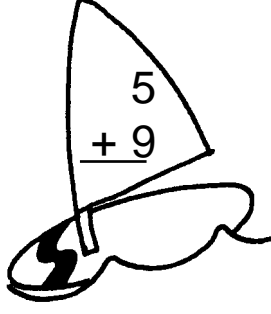



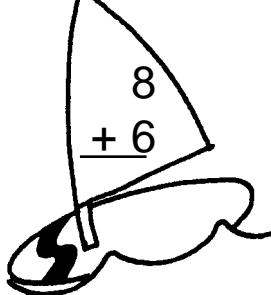



Table of Contents

Addition facts 11–18	4-5
Subtraction facts 11–18	6-7
Number sequencing.....	8–9
Place value: tens and ones	10–11
Odd and even numbers	12–13
Greater than, less than.....	14–15
Time: hour and 5-minute intervals	16–17
Time: elapsed time.....	18–19
Problem solving: money	20–21
Money: addition up to one dollar	22–23
2-digit addition and subtraction with regrouping	24–25
Column addition	26–27
Problem solving: 2-digit addition and subtraction	28–29
Picture graphs.....	30–31
Coordinate geometry	32–33
Measurement	34–37
Place value: hundreds, tens and ones	38–39
Problem solving: dollars and cents.....	40–41
Geometry: symmetry and shapes	42–43
3-digit addition with and without regrouping ones to tens	44–45
3-digit addition: regrouping tens to ones	46–47
3-digit subtraction with and without regrouping tens to ones.....	48–49
3-digit subtraction: regrouping hundreds to tens	50–51
Problem solving: 3-digit addition and subtraction	52–53
Multiplication	54–57
Problem solving: multiplication	58–59
Fractions.....	60–63
Problem solving.....	64

7 2 3 + 3 2 = 7 + 2 3

Surf the Facts

Add the numbers on the sail. Then write the sum on the sailboard.

 $\begin{array}{r} 8 \\ + 9 \\ \hline \end{array}$	 $\begin{array}{r} 7 \\ + 7 \\ \hline \end{array}$	 $\begin{array}{r} 4 \\ + 9 \\ \hline \end{array}$	 $\begin{array}{r} 8 \\ + 8 \\ \hline \end{array}$
 $\begin{array}{r} 9 \\ + 5 \\ \hline \end{array}$	 $\begin{array}{r} 9 \\ + 9 \\ \hline \end{array}$	 $\begin{array}{r} 6 \\ + 8 \\ \hline \end{array}$	 $\begin{array}{r} 9 \\ + 7 \\ \hline \end{array}$
 $\begin{array}{r} 5 \\ + 9 \\ \hline \end{array}$	 $\begin{array}{r} 7 \\ + 8 \\ \hline \end{array}$	 $\begin{array}{r} 9 \\ + 6 \\ \hline \end{array}$	 $\begin{array}{r} 8 \\ + 5 \\ \hline \end{array}$
 $\begin{array}{r} 8 \\ + 6 \\ \hline \end{array}$	 $\begin{array}{r} 9 \\ + 8 \\ \hline \end{array}$	 $\begin{array}{r} 7 \\ + 6 \\ \hline \end{array}$	 $\begin{array}{r} 8 \\ + 7 \\ \hline \end{array}$



Add the number on the sailboard to each number on the wave. Write the sum in the box.

9+

8	
6	
9	
7	

5+

7	
9	
6	
8	

7+

7	
4	
8	
5	

6+


8	
5	
9	
6	

4+

9	
10	
7	
8	

8+

8	
5	
9	
3	



Search for the Facts



Subtract the problems. Write the answer on the camel footprint.

$$\begin{array}{r} 16 \\ - 8 \\ \hline \end{array}$$

$$\begin{array}{r} 15 \\ - 6 \\ \hline \end{array}$$

$$\begin{array}{r} 14 \\ - 7 \\ \hline \end{array}$$

$$\begin{array}{r} 18 \\ - 9 \\ \hline \end{array}$$

$$\begin{array}{r} 15 \\ - 8 \\ \hline \end{array}$$

$$\begin{array}{r} 13 \\ - 5 \\ \hline \end{array}$$

$$\begin{array}{r} 14 \\ - 8 \\ \hline \end{array}$$

$$\begin{array}{r} 13 \\ - 4 \\ \hline \end{array}$$

$$\begin{array}{r} 13 \\ - 6 \\ \hline \end{array}$$

$$\begin{array}{r} 16 \\ - 9 \\ \hline \end{array}$$

$$\begin{array}{r} 15 \\ - 7 \\ \hline \end{array}$$

$$\begin{array}{r} 17 \\ - 9 \\ \hline \end{array}$$

$$\begin{array}{r} 14 \\ - 6 \\ \hline \end{array}$$

$$\begin{array}{r} 13 \\ - 9 \\ \hline \end{array}$$

$$\begin{array}{r} 16 \\ - 7 \\ \hline \end{array}$$

$$\begin{array}{r} 14 \\ - 9 \\ \hline \end{array}$$

$$\begin{array}{r} 13 \\ - 8 \\ \hline \end{array}$$

$$\begin{array}{r} 14 \\ - 5 \\ \hline \end{array}$$

$$\begin{array}{r} 17 \\ - 8 \\ \hline \end{array}$$

$$\begin{array}{r} 15 \\ - 9 \\ \hline \end{array}$$



Start at the bottom of the page. Subtract to find out if the answer is correct. Colour the block if the answer is correct and you will discover the passageway to the pyramid's treasure room.

