




Table of Contents


Telling Time	4–5
Place Value	6–7
Comparing Numbers.....	8–9
Addition/Subtraction.....	10–11
2-digit Addition/Subtraction no regrouping	12–13
2-digit Addition with regrouping	14–15
2-digit Subtraction with regrouping, Sequencing	16–17
Addition/Subtraction.....	18–19
3-digit Addition with regrouping, even and odd	20–21
3-digit Subtraction with regrouping, Problem Solving.....	22–23
4-digit Addition with regrouping	24–25
4-digit Subtraction with regrouping, Rounding.....	26–27
Addition/Subtraction, Venn Diagram.....	28–29
3-Addend Addition/Point Location.....	30–31
Fractions.....	32–33
Decimals	34–35
Geometry, Angles and Shapes.....	36–37
Geometric Shapes.....	38–39
Area, Perimeter and Volume	40–41
Three-dimensional Geometry, Graphing.....	42–43
Money	44–45
Money, Geometry, Problem Solving Matrix	46–47
Coordinates	48–49
Multiplication	50–51
Multiplication, Bar Graph	52–53
Multiplication, Pie Graph.....	54–55
Multiplication/Division	56–57
Division/Multiplication	58–59
Division with remainder.....	60–61
Multiplication/Division	62–63
Multiplication/Division, Problem Solving.....	64–65
Multiplication/Division	66–67
Problem Solving	68–69
Addition/Subtraction/Multiplication/Division	70–71
Computation.....	72

Time Will Tell


Write the time on each clock on the first line. Subtract or add minutes to the first time and write the new time on the second line as directed.




15 minutes before:



10 minutes after:





20 minutes before:



30 minutes after:



Read each story. Write the new time on the line.

1. The class went out for recess at 2.10 p.m. The bell rang 15 minutes later. What time did the bell ring? _____




2. Music class ended at 11.05 a.m. It lasted 35 minutes. What time did it begin? _____

3. Art class lasts 45 minutes. If the class begins at 2.25 p.m., what time will it end? _____



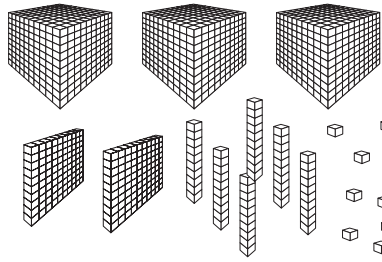
4. The movie began at 1.20 p.m. It lasted for 30 minutes. What time did the movie end?


5. Lunch break ended at 12.20 p.m. The break is 50 minutes. What time did it begin? _____

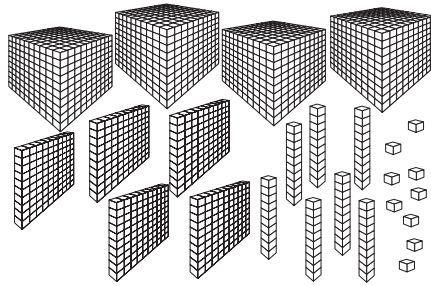


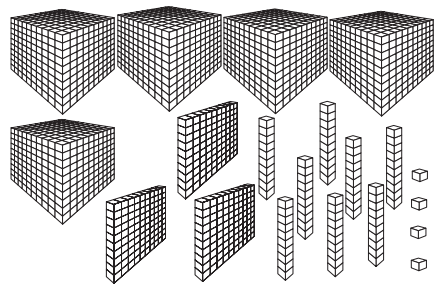
What Do We See?

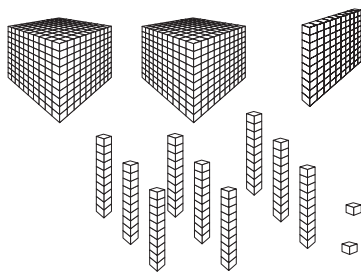
Look at the representation of the base ten blocks. Count the number of blocks and write the standard numerical form on the first line and the expanded numerical form on the second line.
















place
value

Write the value of the underlined digit.

1. 22 485

2. 4761

3. 67 183

4. 356

5. 7359

6. 80 426

7. 521

8. 14 280

9. 36 017

10. 2651

11. 81 046

12. 56 271

13. 7912

14. 42 759

