

Table of contents

Multiplying one digit factors by one or two digit factors

When Big Chief Shortcake died, what did his sister, Golden Straw say? (Straw bury shortcake)	1
What did the pony say when he sneezed? (Excuse me, I am a little hoarse)	2
Why did the lady cover her ears when she walked past the chickens? (Because she did not want to listen to their fowl language)	3
What has 18 legs and catches flies? (A baseball team).	4
Why did the man in jail want to catch the measles? (He wanted to break out)	5
What sickness can't you talk about until it's cured? (The sickness laryngitis)	6

Multiples

Multiples.	7
Multiples, multiples, multiples (Using the calculator)	8

Multiplying one digit factors by three or more digit factors

What do you get if a dinosaur steps on your foot? (You get anklesaurus)	9
How can you tell a happy motorcyclist? (By the bugs in his teeth)	10
What did the clothes line say to the wet laundry? (Why don't you hang around awhile)	11

Finding factors

King Tut's factor pyramids – Level 1	12
King Tut's factor pyramids – Level 2	13

Using exponents

What is the title of this picture? (A spider doing a handstand)	14
What did Noah use to see in the dark? (Floodlights)	15

Multiplying by multiples of ten

Why is tennis such a noisy game? (Because each player raises a racket)	16
--	----

Multiplying two digit factors by two digit factors

What did one maths book say to another? (Boy do I have problems)	17
What did one of Frankenstein's ears say to the other? (I didn't know we lived on the same block)	18

Estimating products

- Why did the Prime Minister arrange a meeting with a carpenter?
(He wanted to replace his cabinet) 19

Estimating products with a calculator

- What happened when the male monster met the female monster?
(Love at first fright) 20

Multiplying three digit factors by three or more digit factors

- What's the difference between a piano and a fish?
(You can tune a piano but you cannot tuna fish) 21
- What did the bread dough say to the baker? (It's nice to be kneaded) 22
- Why did the chimney call the doctor? (Because the chimney had the flue) 23
- Why did the nuclear powered robot break down? (It had atomic ache). 24

Using lattice multiplication

- Lattice multiplication 25

Multiplying with a calculator

- Multiplication calculator activities 26

Solving word problems

- What is the minister doing when he rehearses his sermon?
(He is practising what he preaches) 27
- Where do moles get married? (In a tunnel of love) 28
- Why did the detective arrest the baseball player?
(He heard that he stole a lot of bases) 29

Multiplication speed test

- Multiplication facts speed test (0-12) 30

Dividing by one digit divisors

- Where do polar bears vote? (At the North Pole) 31
- What did one wall say to the other wall? (I will meet you at the corner) 32
- What time do ducks get up in the morning? (At the quack of dawn) 33
- What is the difference between a dog and a marine biologist?
(One wags a tail and the other tags a whale) 34
- What kind of car do rich rock stars drive? (A rock and rolls royce) 35

Estimating quotients

- What is Mary short for? (She has short legs) 35

Dividing by two digit divisors

What did the pencil say to the pencil sharpener? (Stop going around in circles and get to the point)	37
Why did the ram fall over the cliff? (He did not see the ewe turn)	38
Why did the house call for a doctor? (Because it had window panes)	39
Why did the bowling pins lie down? (Because they were on strike)	40
Do rabbits use combs? (No, they use hare brushes)	41
Why did the jogger go see the veterinarian? (Because his calves hurt).	42

Dividing with a calculator

What is the title of this picture? (Doughnut with eyelashes)	43
--	----

Divisibility rules

Divisibility Tricks for 3 and 11	44
--	----

Find averages

What happens when corn catches a cold? (It gets an earache)	45
Mathosaurus: What was I? (Corythosaurus).	46

Dividing two or three digit divisors into four or five digit dividends

Why did the whale cross the ocean? (To get to the other tide)	47
What does an octopus wear? (A coat of arms)	48
Knock, knock. Who's there? Soup. Soup who? (Souperman at your service)	49
What did the new tyre say to the old tyre? (If you can't retread, retire)	50

Whole number practice; addition, subtraction, multiplication and division

Maths Bingo	51
What is a computer's favourite snack food (Silicon chips)	52
Hexagonal mania.	53
Mathosaurus: What was I? (Iguanodon)	54

Solving word problems using addition, subtraction, multiplication and division

What kind of gum do whales chew? (Blubber gum)	55
What did the boy say when he opened the piggy bank and found nothing? (OICURMT)	56
What invention allows you to see through walls? (A window)	57

Division speed test

Division facts speed test (0-9)	58
---	----


Higher level thinking activities using whole numbers

Brain challengers: Multiplication and division 59
Shared sides 60
Maze maths 61
Operational choices 62
Using whole numbers with geometry 63
Fill in the missing digits 64
'30' maths 65
Box equations 66
Puzzlers 67
School lunch menu 68
Find the sum 69
Shape maths 70
Maths squares 71
Operation solutions. 72
Circular maths magic 73
Maths patterns 74
Honeycomb maths 75
Letter code 76
Multiplication stumpers 77

Answer key 78–84

When Big Chief Shortcake died, what did his sister, Golden Straw, say?

Directions: Solve each problem below on another sheet of paper. Find your answer in the secret code at the bottom of the page. Each time your answer appears in the secret code, write the letter of the problem above it.



$$R = 5 \times 12 =$$

$$T = 3 \times 42 =$$

$$K = 6 \times 48 =$$

$$E = 4 \times 73 =$$

$$U = 7 \times 45 =$$

$$B = 2 \times 67 =$$

$$O = 8 \times 49 =$$

$$S = 6 \times 87 =$$

$$Y = 6 \times 72 =$$

$$W = 9 \times 34 =$$


$$A = 5 \times 60 =$$

$$C = 3 \times 79 =$$

$$H = 9 \times 62 =$$

$$\begin{array}{r} 522 \\ \times 126 \\ \hline 60 \\ 300 \\ 134 \\ \hline 60 \\ 432 \end{array}$$

$$\begin{array}{r} 522 \\ \times 558 \\ \hline 60 \\ 126 \\ 237 \\ 300 \\ 288 \\ 292 \end{array}$$



What did the pony say when he sneezed?

Directions: Solve each problem below on another sheet of paper. Find your answer in the secret code at the bottom of the page. Each time your answer appears in the secret code, write the letter of the problem above it.

$$R = 6 \times 12 =$$

$$A = 2 \times 38 =$$

$$M = 7 \times 68 =$$

$$O = 3 \times 15 =$$

$$L = 9 \times 18 =$$

$$C = 3 \times 48 =$$

$$X = 7 \times 23 =$$

$$U = 8 \times 37 =$$

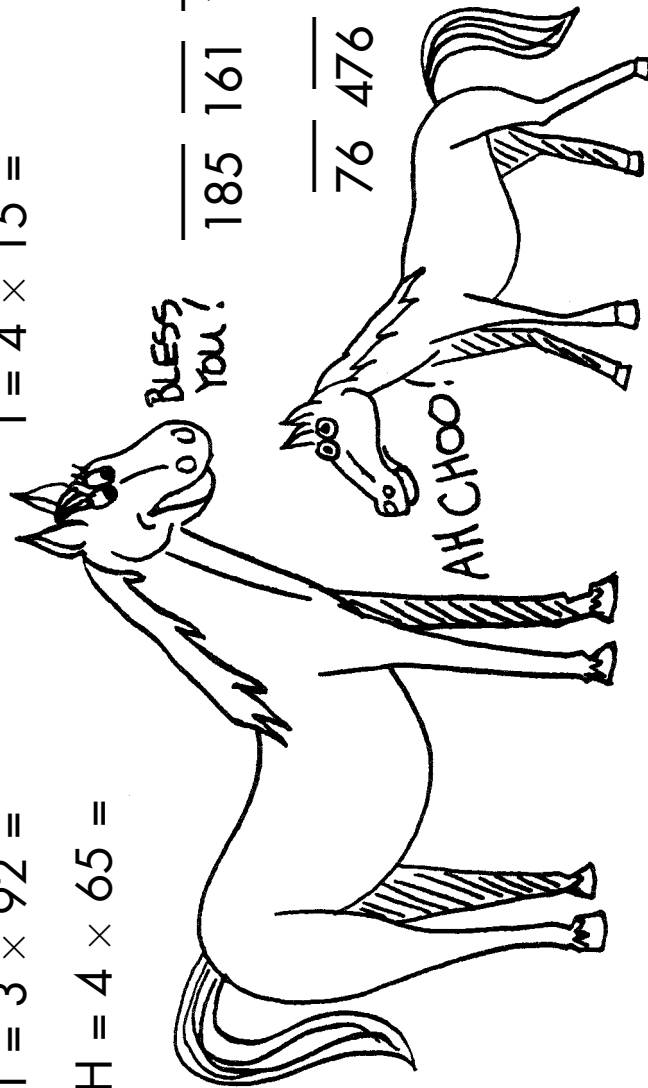
$$E = 5 \times 37 =$$

$$T = 3 \times 92 =$$

$$I = 4 \times 15 =$$

$$S = 9 \times 54 =$$

$$H = 4 \times 65 =$$



NAME _____

185 161 144 296 486 185 476 185 60

76 476 76 162 60 276 276 162 185

260 45 76 72 486 185

Why did the lady cover her ears when she walked past the chickens?

Directions: Solve each problem below on another sheet of paper. Find your answer in the secret code at the bottom of the page. Each time your answer appears in the secret code, write the letter of the problem above it.

F = $6 \times 6 \times 6 =$

G = $5 \times 8 \times 5 =$

R = $5 \times 3 \times 6 =$

L = $4 \times 9 \times 2 =$

W = $7 \times 3 \times 4 =$

T = $1 \times 10 \times 4 =$

N = $9 \times 8 \times 0 =$

O = $7 \times 7 \times 6 =$

I = $9 \times 8 \times 6 =$

D = $7 \times 5 \times 8 =$

H = $8 \times 3 \times 7 =$

S = $8 \times 6 \times 7 =$

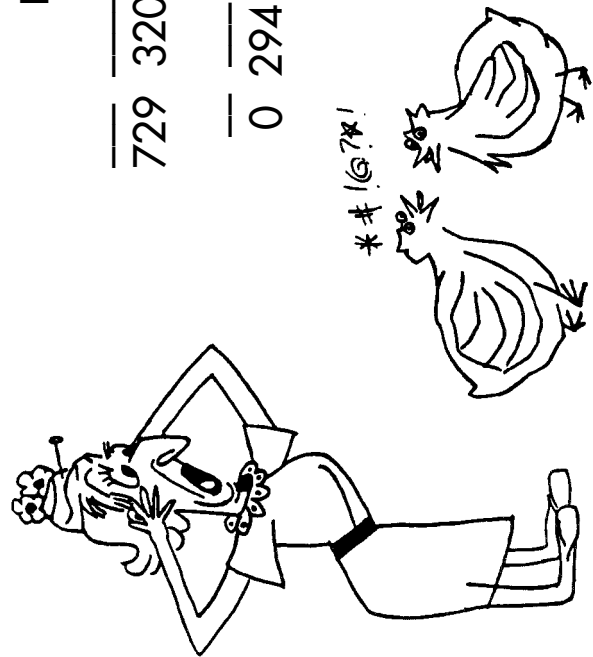
U = $4 \times 8 \times 7 =$

A = $9 \times 5 \times 6 =$

C = $3 \times 9 \times 5 =$

E = $5 \times 8 \times 8 =$

B = $9 \times 9 \times 9 =$



729 320 135 270 224 336 320 336 168 320 280 432 280

0 294 40 84 270 0 40 40 294 72 432 336 40 320 0

40 294 40 168 320 432 90 216 294 84 72

72 270 0 200 224 270 200 320